




Which Has More?

Materials: counters of two colors, graph template



1. Take a handful of counters. Sort the counters into two categories on the graph.
2. Draw and color the counters.
3. Count how many in each category and write the numbers.
4. Tell a friend which category has more counters and which category has fewer counters.

Red and Yellow Counters





Red and Yellow Counters				

_____ has more counters.

_____ has fewer counters.

_____ and _____ **Counters**



_____ and _____ Counters				

_____ has more counters.

_____ has fewer counters.