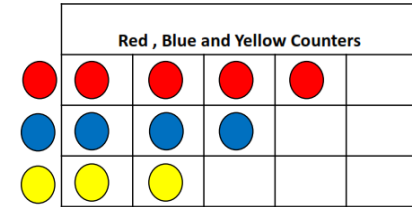





Which Has Fewer?

Materials: counters of 3 colors, graph template






1. Collect 12 counters. Be sure to take some of each color.
2. Sort the counters into three categories on the graph.
3. Give your graph a title. Draw and color the counters.
4. Count and record how many in each category.
5. Write 3 sentences to describe your data using words from the Word Bank.

Word Bank:	fewer than	fewest
more than	most	equal



_____, _____ and _____ **Counters**



There are fewer _____ counters than _____.