




Joe's Fruit and Vegetable Store




apple
25¢




sweetcorn
39¢




bananas
30¢




strawberry
99¢ per box




apricot
20¢




cherries
75¢ per bag



grapes
15¢



tomato
15¢



watermelon
35¢ per slice

I bought three apricots and a banana. How much did I spend?

A.

I bought two pieces of fruit and spent 45¢. What might I have bought?

B.

I bought a banana and an apple and gave the shopkeeper three quarters. How much change did I receive?

C.

You buy a slice of watermelon and four tomatoes. How much do you spend?

D.

Max buys two bags of grapes and a bag of cherries. How much change will he get from a 5 dollar bill?

E.

I buy one apple and two apricots for lunch. How much do I spend?

F.

Choose any one item from the store. Show what coins you could use to pay the exact cost.

G.

Choose any two items from the store. Show what coins you could use to pay the exact cost.

H.

You buy five tomatoes. How much change do you get from a one dollar bill?

I.

Ben buys three bananas. Meg buys two sweetcorn. Who spends more? How much more?

J.

Jack has \$1.00 and wants to buy three slices of watermelon. Does he have enough money?

K.

I spent 95¢ at Joe's Fruit and Vegetable Store. What might I have bought?

L.